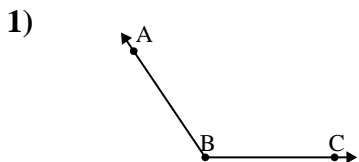




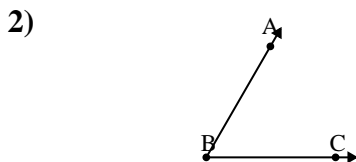
Solve each problem.

Answers



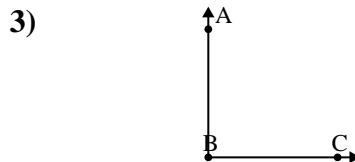
Which choice best represents $\angle ABC$?

- A. 15°
- B. 100°
- C. 124°
- D. 58°



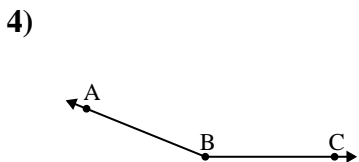
Which choice best represents $\angle ABC$?

- A. 39°
- B. 150°
- C. 18°
- D. 60°



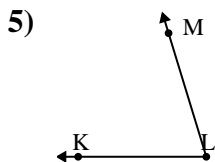
Which choice best represents $\angle ABC$?

- A. 33°
- B. 122°
- C. 90°
- D. 8°



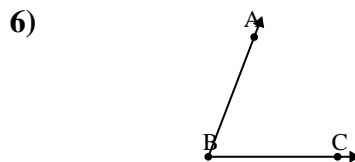
Which choice best represents $\angle ABC$?

- A. 158°
- B. 92°
- C. 68°
- D. 113°



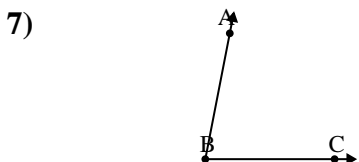
Which choice best represents $\angle KLM$?

- A. 175°
- B. 150°
- C. 33°
- D. 73°



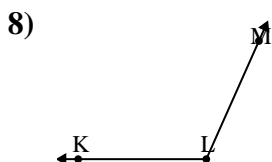
Which choice best represents $\angle ABC$?

- A. 153°
- B. 110°
- C. 69°
- D. 38°



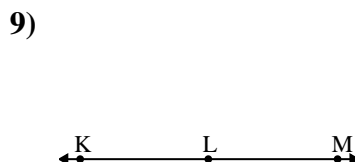
Which choice best represents $\angle ABC$?

- A. 179°
- B. 79°
- C. 136°
- D. 34°



Which choice best represents $\angle KLM$?

- A. 68°
- B. 168°
- C. 0°
- D. 114°



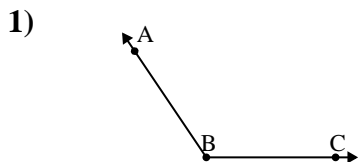
Which choice best represents $\angle KLM$?

- A. 180°
- B. 70°
- C. 5°
- D. 106°

- 1. _____
- 2. _____
- 3. _____
- 4. _____
- 5. _____
- 6. _____
- 7. _____
- 8. _____
- 9. _____

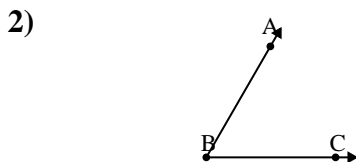


Solve each problem.



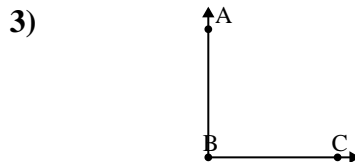
Which choice best represents $\angle ABC$?

- A. 15°
- B. 100°
- C. 124°
- D. 58°



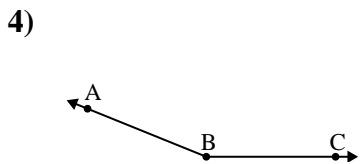
Which choice best represents $\angle ABC$?

- A. 39°
- B. 150°
- C. 18°
- D. 60°



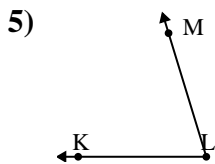
Which choice best represents $\angle ABC$?

- A. 33°
- B. 122°
- C. 90°
- D. 8°



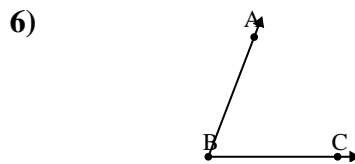
Which choice best represents $\angle ABC$?

- A. 158°
- B. 92°
- C. 68°
- D. 113°



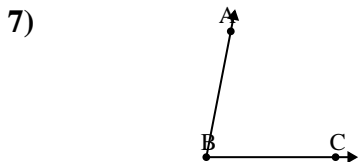
Which choice best represents $\angle KLM$?

- A. 175°
- B. 150°
- C. 33°
- D. 73°



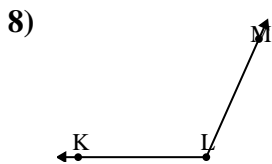
Which choice best represents $\angle ABC$?

- A. 153°
- B. 110°
- C. 69°
- D. 38°



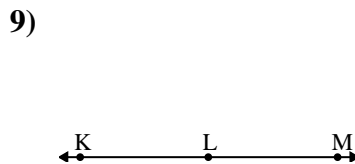
Which choice best represents $\angle ABC$?

- A. 179°
- B. 79°
- C. 136°
- D. 34°



Which choice best represents $\angle KLM$?

- A. 68°
- B. 168°
- C. 0°
- D. 114°



Which choice best represents $\angle KLM$?

- A. 180°
- B. 70°
- C. 5°
- D. 106°

Answers

- 1. **C**
- 2. **D**
- 3. **C**
- 4. **A**
- 5. **D**
- 6. **C**
- 7. **B**
- 8. **D**
- 9. **A**